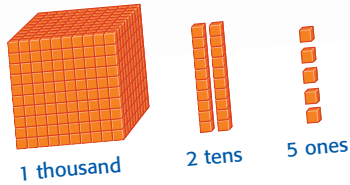


ACTIVITY


- 2 Use base-ten blocks to model 1,025 in two ways.

One Way

Use thousands, hundreds, tens, and ones.



Another Way Use hundreds, tens, and ones.



Think About It

1. Why can you use different combinations of thousands, hundreds, tens, and ones to model the same number?

CHECK What You Know

Use base-ten blocks to model each number in two ways.

2. 135


3. 304

4. 1,283


5. 1,890

Write each number modeled.

6.



7.



8. **WRITING IN MATH** Explain how base-ten blocks are helpful in understanding numbers.